
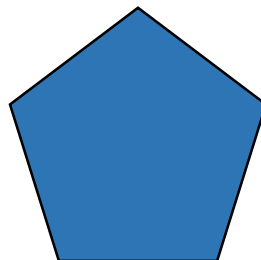



The number of lines of symmetry these shapes have is equal to the number of sides they have.



True

The number of lines of symmetry in a regular polygon is equal to the number of sides it has.

